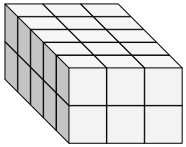


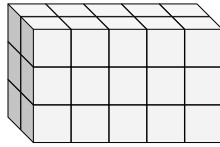


Find the length, width and height of the rectangular prism. Then find the volume.

Ex)



1)



Answers

Ex. 5 3 2 30

1. \_\_\_\_\_

2. \_\_\_\_\_

3. \_\_\_\_\_

4. \_\_\_\_\_

5. \_\_\_\_\_

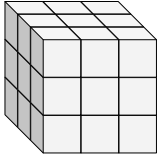
6. \_\_\_\_\_

7. \_\_\_\_\_

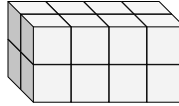
8. \_\_\_\_\_

9. \_\_\_\_\_

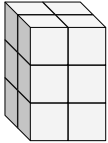
2)



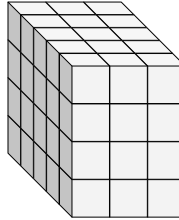
3)



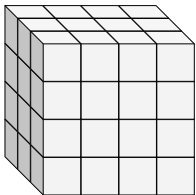
4)



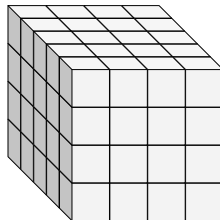
5)



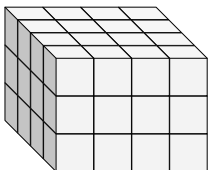
6)



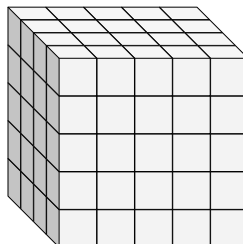
7)



8)

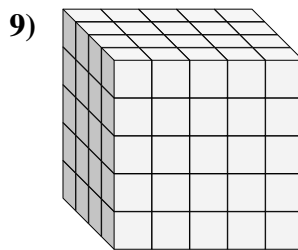
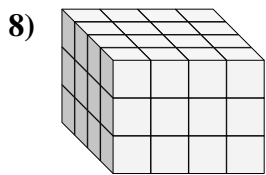
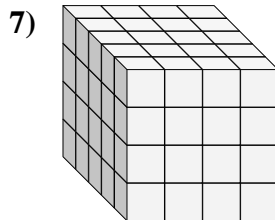
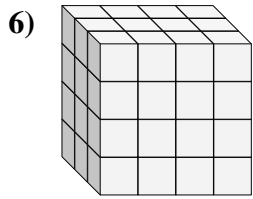
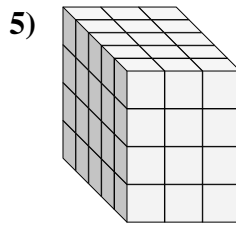
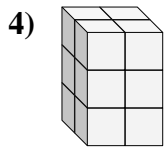
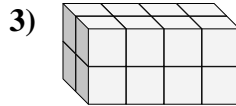
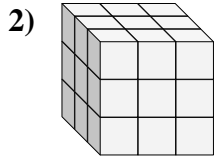
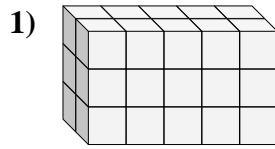
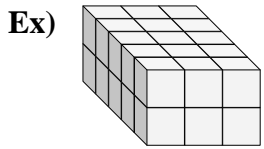


9)





Find the length, width and height of the rectangular prism. Then find the volume.



Answers

Ex. 5 3 2 30

1. 2 5 3 30

2. 3 3 3 27

3. 2 4 2 16

4. 2 2 3 12

5. 5 3 4 60

6. 3 4 4 48

7. 5 4 4 80

8. 4 4 3 48

9. 4 5 5 100